

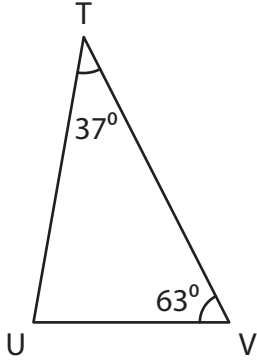
Name : _____

Triangle - Interior Angles

Sheet 1

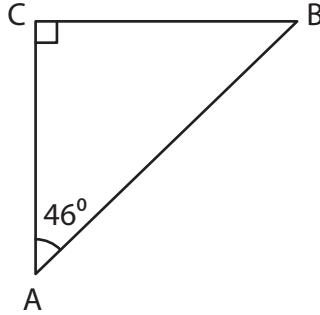
Find the measure of the indicated angle in each triangle.

1)



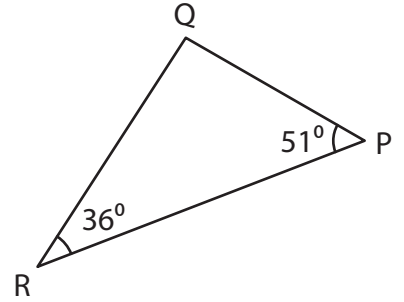
$m\angle U =$ _____

2)



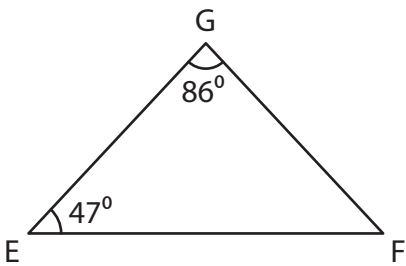
$m\angle B =$ _____

3)



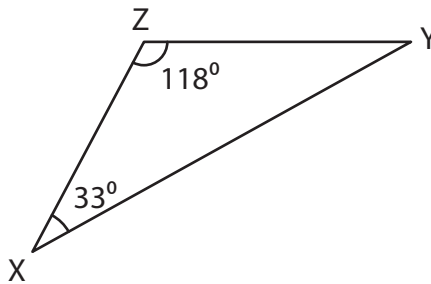
$m\angle Q =$ _____

4)



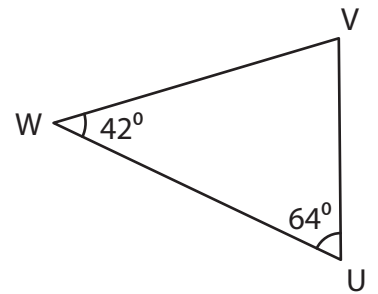
$m\angle F =$ _____

5)



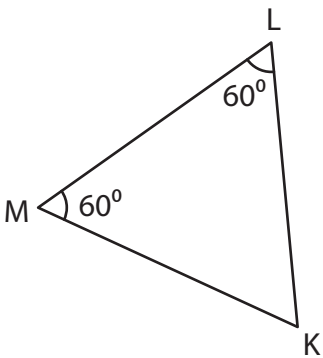
$m\angle Y =$ _____

6)



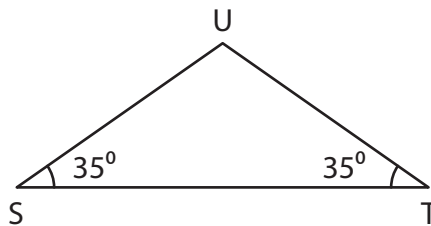
$m\angle V =$ _____

7)



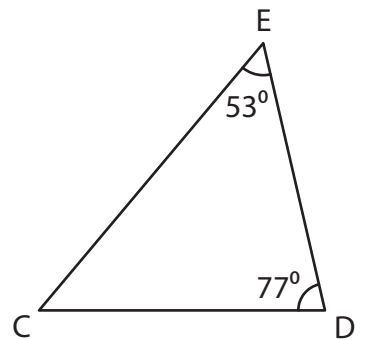
$m\angle K =$ _____

8)



$m\angle U =$ _____

9)



$m\angle C =$ _____

