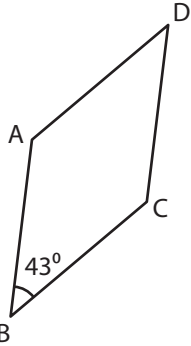


Name : _____

Rhombus - Angles

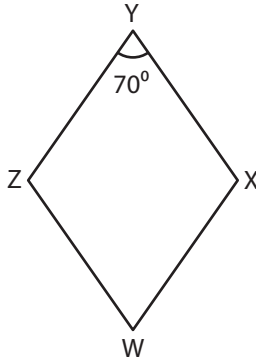
A) Find the measure of the indicated angle in each rhombus.

1)



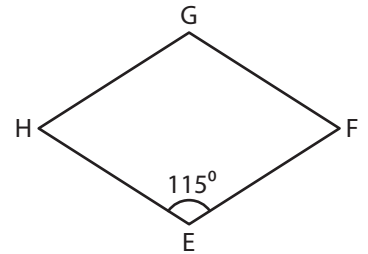
$m\angle A =$ _____

2)



$m\angle W =$ _____

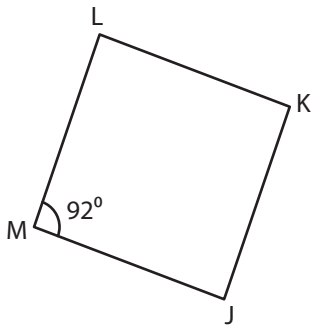
3)



$m\angle H =$ _____

B) Find the measure of the indicated angles in each rhombus.

4)

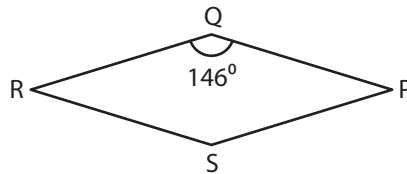


$m\angle J =$ _____

$m\angle K =$ _____

$m\angle L =$ _____

5)

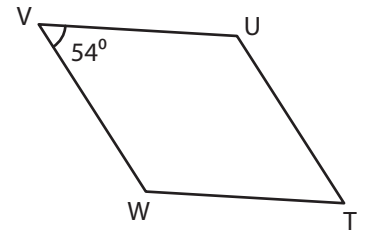


$m\angle P =$ _____

$m\angle R =$ _____

$m\angle S =$ _____

6)



$m\angle T =$ _____

$m\angle U =$ _____

$m\angle W =$ _____

7) In the rhombus CDEF, $m\angle C$ is 129° . Determine $m\angle D$.

8) Find $m\angle Q$ in the rhombus QRST, if $m\angle R$ is 60° .
