

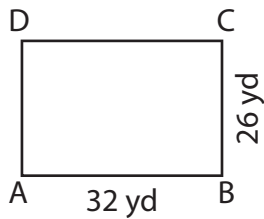
Name : _____

Sides of a Rectangle

Sheet 1

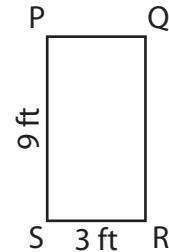
Find the length of the remaining sides of each rectangle.

1)



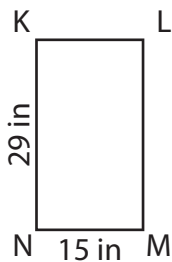
CD = _____ ; AD = _____

2)



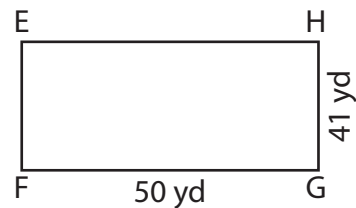
PQ = _____ ; QR = _____

3)



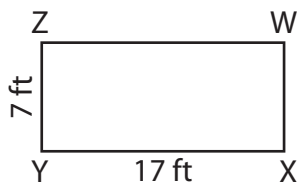
LM = _____ ; KL = _____

4)



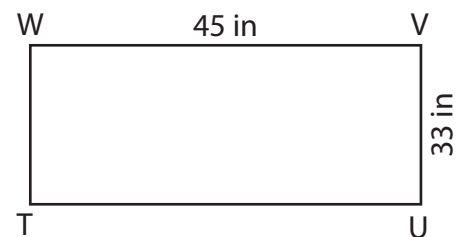
EF = _____ ; EH = _____

5)



WX = _____ ; WZ = _____

6)



TU = _____ ; TW = _____

7) The lengths of \overline{RS} and \overline{ST} of a rectangle RSTU are 7 yards and 5 yards respectively. Find TU and RU.

