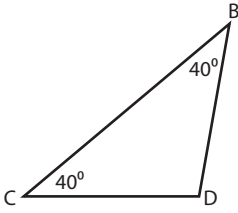


Triangle - Interior Angle

Example:



Sum of the interior angles = 180°

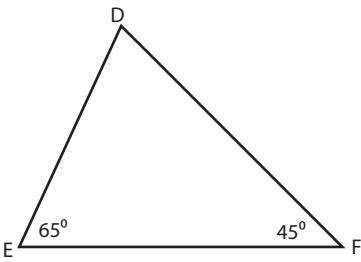
Sum of the interior angles = $40^\circ + 40^\circ + \angle D$

$180^\circ = 80^\circ + \angle D$

$\angle D = 180^\circ - 80^\circ = 100^\circ$

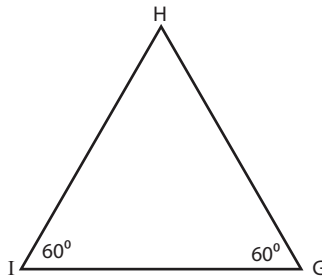
Find the unknown interior angle for each triangle.

1)



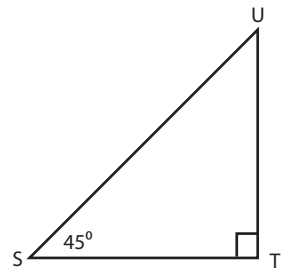
$\angle D =$

2)



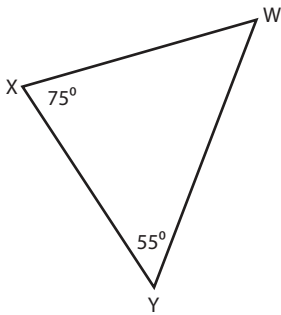
$\angle H =$

3)



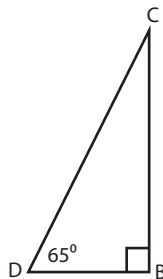
$\angle U =$

4)



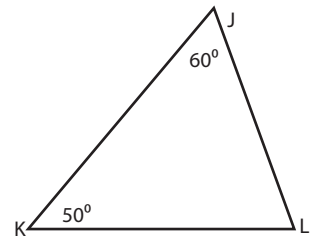
$\angle W =$

5)



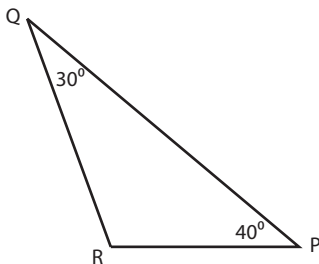
$\angle C =$

6)



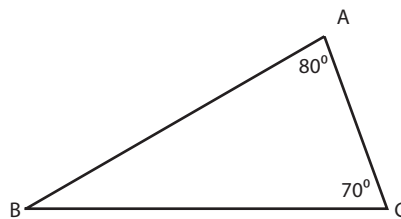
$\angle L =$

7)



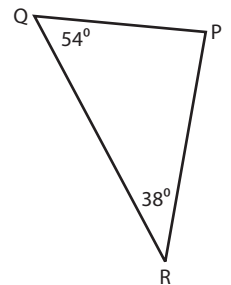
$\angle R =$

8)



$\angle B =$

9)



$\angle P =$

