

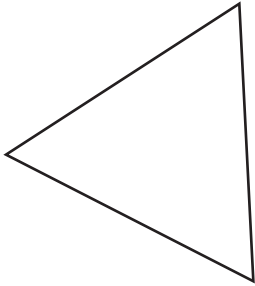
Name : _____

Identifying Triangles

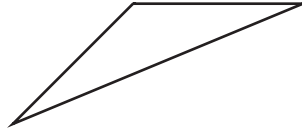
Angles: S1

Identify each triangle based on angles. (Acute, Obtuse or Right)

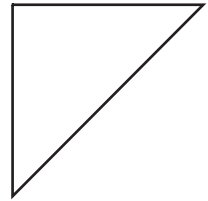
1)



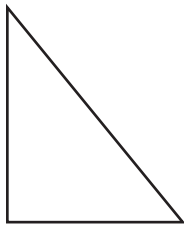
2)



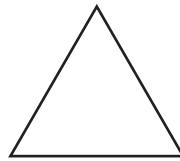
3)



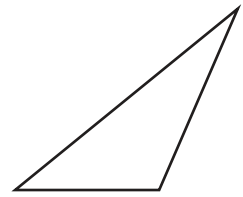
4)



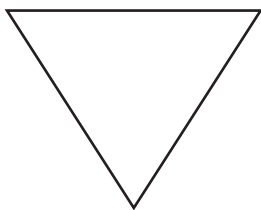
5)



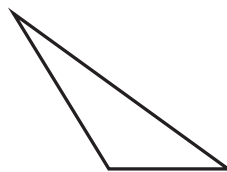
6)



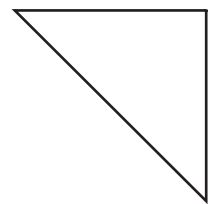
7)



8)



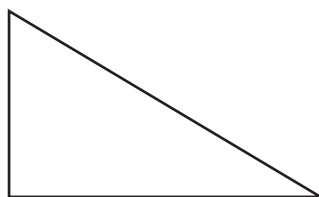
9)



10)



11)



12)